



ST. MONTFORT SCHOOL, BHOPAL

SUMMER HOLIDAY HOMEWORK – 2022-23

CLASS - III

ENGLISH

1. Write what is noun and paste 10 pictures of nouns. (Interleaf Copy)
2. Learn Q/A and exercises of MCB chapter 1. Rekha's New Friend.

HINDI

व्याकरण सुरभि पुस्तक

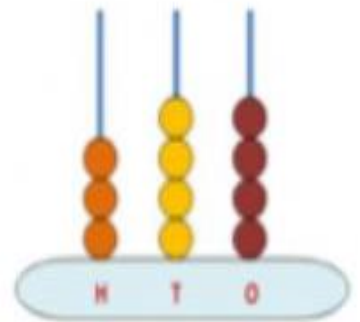
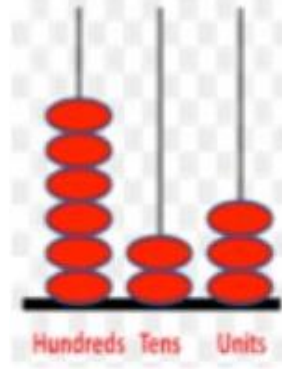
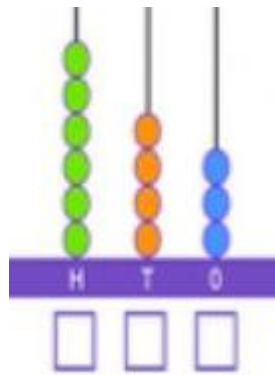
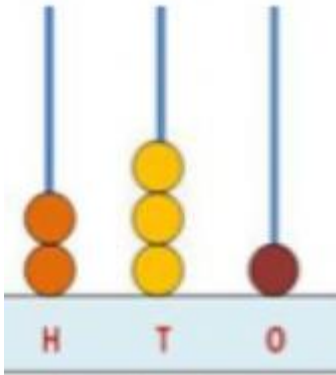
पाठ -5 (शब्द भंडार)

- 1) विलोम शब्द :- 'ज्ञान' से 'उचित' तक
- 2) पर्यायवाची शब्द :- 'आग' से 'घर' तक
- 3) अनेक शब्दों के लिए एक शब्द :- 'धार्मिक' से 'अद्वितीय' तक
- 4) अनेकार्थी शब्द :- 'अंक' से 'तीर' तक
- 5) युग्म शब्द :- 'अंस-अंश' से 'समान-सम्मान' तक

उपर्युक्त सभी SA-1 का भाग हिन्दी कॉपी में लिखना एवं याद करना है।

MATHS

Q.1 Write the numbers for the given pictures of abacus.



Q.2: Write the number names for the following numbers.

- (a) 728 (b) 865 (c) 984 (d) 513

Q.3: Write the place value of all the digits for the given numbers.

- (a) 975 (b) 347 (c) 6832 (d) 1097

Q.4: Write the following numbers in ascending order.

- (a) 245, 365, 856, 990, 774, 386

- (b) 540, 685, 315, 960, 714, 640

Q.5: Write the following numbers in descending order.

(a) 782, 398, 689, 254, 366, 412

(b) 460, 569, 873, 223, 355, 831

Q.6: Write the numbers from:

(a) 218 to 228

(b) 954 to 965

Q.7: Write the following numbers in expanded form:

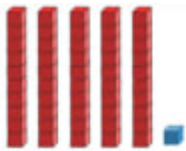
(a) 325 (b) 654 (c) 729 (d) 381

Q.8: Write the numbers:

	Before		After
1.		889	
2.		748	
3.		331	

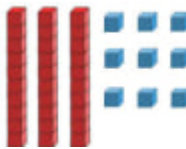
		Between	
1.	990		992
2.	667		669
3.	443		445

Q.9: Write how many groups of tens and ones are there.



_____ tens _____ one

_____ + _____ = _____



_____ tens _____ ones

_____ + _____ = _____

Q.10: Encircle the odd numbers from the following:

558` 629 354 899 999 142 363 771 880

NOTE : Do the given worksheet in Maths Classwork Copy.

E.V.S.

1. Chapter 1. Me and My Family

Make a family tree by pasting the pictures of your family members in a scrap book.

2. Chapter 3. Work around Me

Make any two 2-D model of occupation and paste in scrap book.

NOTE : Activity to be done in one scrap book.

